




During indoor recess the students got to vote on which movie to watch. The voting results are listed below. Use the bar graph to answer the questions.

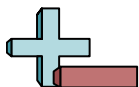


Each  = 2 votes

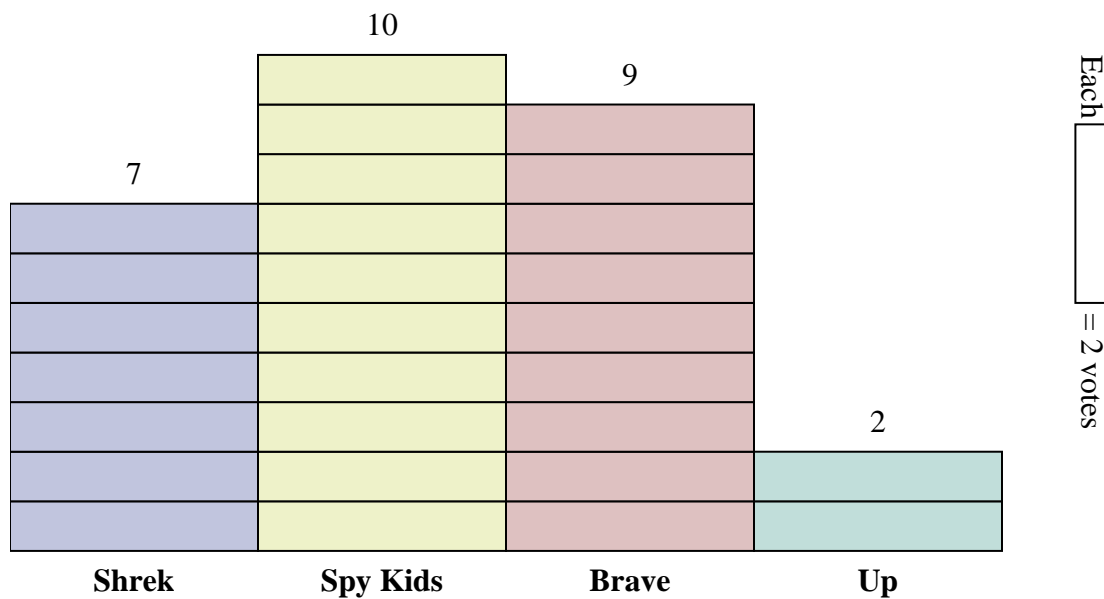
Answers

1. _____
2. _____
3. _____
4. _____
5. _____
6. _____
7. _____
8. _____
9. _____
10. _____

- 1) How many more votes did Brave receive than Shrek?
- 2) Which movie received the most votes?
- 3) Which movie received the fewest votes?
- 4) What is the total number of students who voted?
- 5) Did fewer students vote for Up or for Shrek?
- 6) Did more people vote for Brave or for Spy Kids?
- 7) Which movie received exactly 18 votes?
- 8) How many people voted for Spy Kids?
- 9) What is the combined number of people who voted for Spy Kids and Shrek?
- 10) What is the difference in the number of people who voted for Up and the number who voted for Brave?



During indoor recess the students got to vote on which movie to watch. The voting results are listed below. Use the bar graph to answer the questions.



- How many more votes did Brave receive than Shrek?
- Which movie received the most votes?
- Which movie received the fewest votes?
- What is the total number of students who voted?
- Did fewer students vote for Up or for Shrek?
- Did more people vote for Brave or for Spy Kids?
- Which movie received exactly 18 votes?
- How many people voted for Spy Kids?
- What is the combined number of people who voted for Spy Kids and Shrek?
- What is the difference in the number of people who voted for Up and the number who voted for Brave?

Answers

- 4**
- Spy Kids**
- Up**
- 56**
- Up**
- Spy Kids**
- Brave**
- 20**
- 34**
- 14**